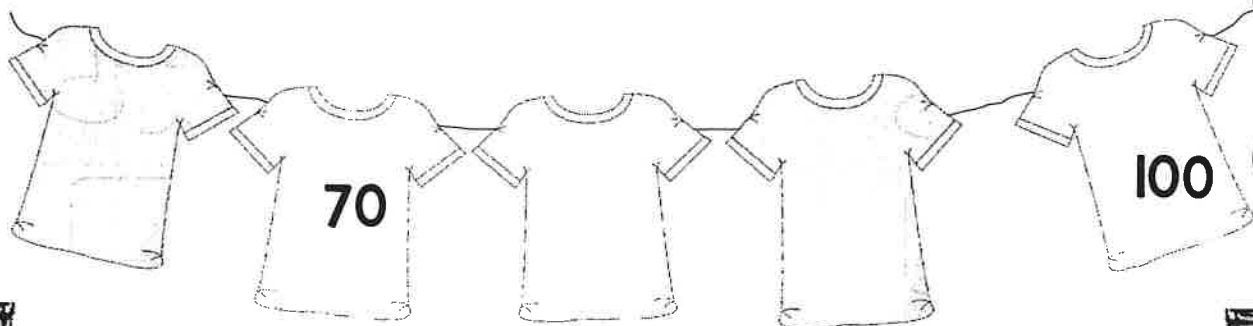

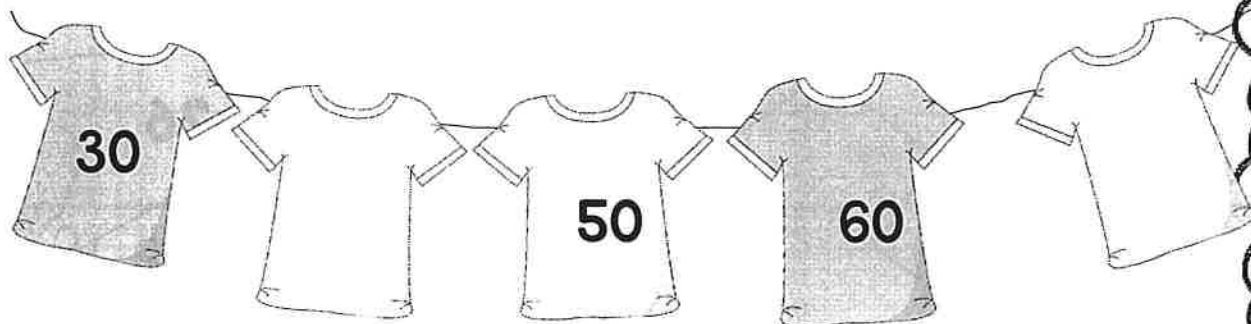


Name:----- Date:-----
Counting by 10




Name:----- Date:-----

Counting by 5

30

65

85



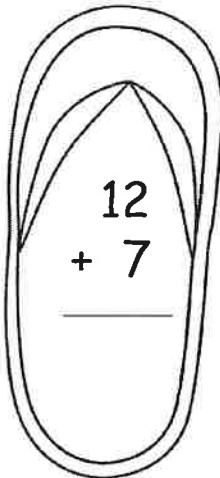
Name:----- Date:-----
Write the number words in each box.

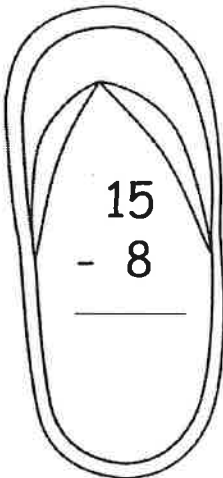


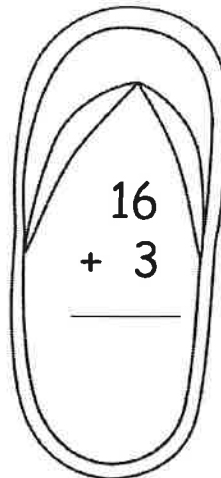
Name:-----

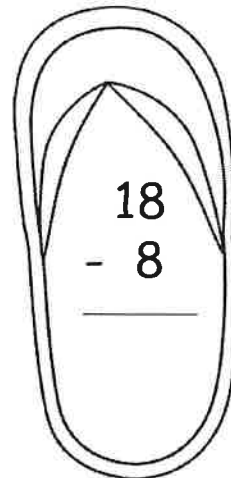
Date:-----

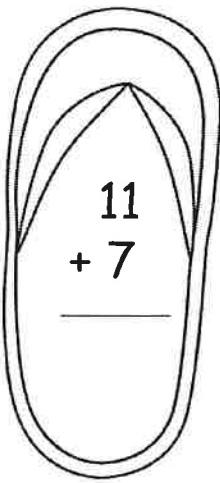
Flip Flop Addition and Subtraction

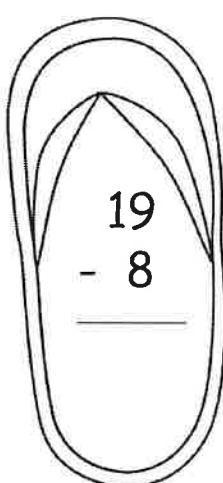

$$\begin{array}{r} 12 \\ + 7 \\ \hline \end{array}$$

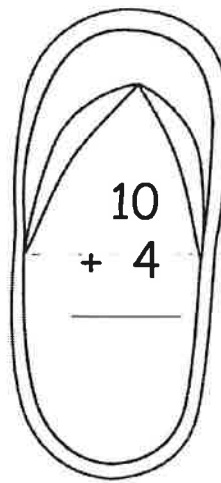

$$\begin{array}{r} 15 \\ - 8 \\ \hline \end{array}$$

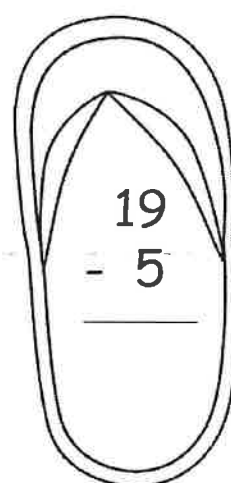

$$\begin{array}{r} 16 \\ + 3 \\ \hline \end{array}$$

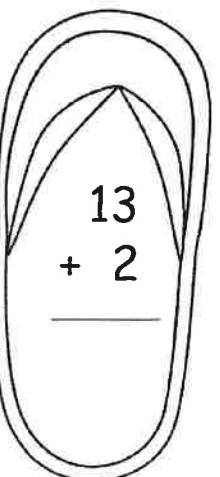

$$\begin{array}{r} 18 \\ - 8 \\ \hline \end{array}$$

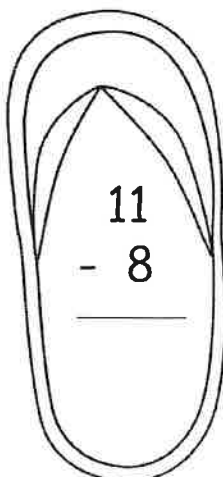

$$\begin{array}{r} 11 \\ + 7 \\ \hline \end{array}$$

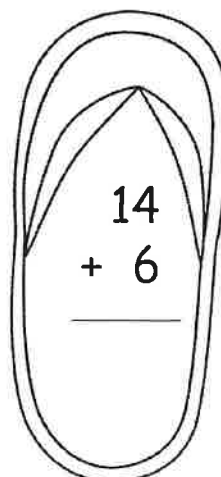

$$\begin{array}{r} 19 \\ - 8 \\ \hline \end{array}$$

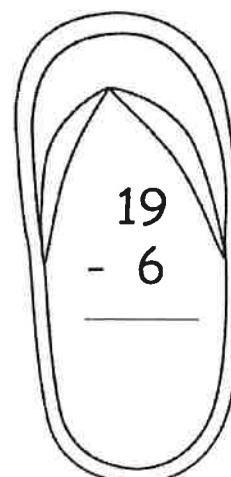

$$\begin{array}{r} 10 \\ + 4 \\ \hline \end{array}$$


$$\begin{array}{r} 19 \\ - 5 \\ \hline \end{array}$$


$$\begin{array}{r} 13 \\ + 2 \\ \hline \end{array}$$


$$\begin{array}{r} 11 \\ - 8 \\ \hline \end{array}$$


$$\begin{array}{r} 14 \\ + 6 \\ \hline \end{array}$$


$$\begin{array}{r} 19 \\ - 6 \\ \hline \end{array}$$

Name:----- Date:-----

Double-digit Addition

$$\begin{array}{r} 43 \\ + 22 \\ \hline \end{array}$$

$$\begin{array}{r} 33 \\ + 42 \\ \hline \end{array}$$

$$\begin{array}{r} 44 \\ + 52 \\ \hline \end{array}$$

$$\begin{array}{r} 57 \\ + 12 \\ \hline \end{array}$$

$$\begin{array}{r} 33 \\ + 62 \\ \hline \end{array}$$

$$\begin{array}{r} 89 \\ + 10 \\ \hline \end{array}$$

$$\begin{array}{r} 54 \\ + 32 \\ \hline \end{array}$$

$$\begin{array}{r} 37 \\ + 42 \\ \hline \end{array}$$

$$\begin{array}{r} 42 \\ + 51 \\ \hline \end{array}$$

Name:----- Date:-----

Double-digit Subtraction

$$\begin{array}{r} 63 \\ - 12 \\ \hline \end{array}$$

$$\begin{array}{r} 37 \\ - 12 \\ \hline \end{array}$$

$$\begin{array}{r} 54 \\ - 14 \\ \hline \end{array}$$

$$\begin{array}{r} 68 \\ - 46 \\ \hline \end{array}$$

$$\begin{array}{r} 76 \\ - 62 \\ \hline \end{array}$$

$$\begin{array}{r} 89 \\ - 20 \\ \hline \end{array}$$


$$\begin{array}{r} 54 \\ - 32 \\ \hline \end{array}$$

$$\begin{array}{r} 87 \\ - 42 \\ \hline \end{array}$$

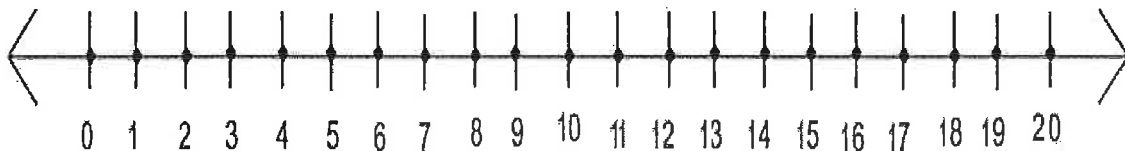
$$\begin{array}{r} 92 \\ - 51 \\ \hline \end{array}$$

Name:----- Date:-----



Solve each word problem



My dad gave me 12 apples. My sister gave me some more apples and then I had 18 apples. How many apples did my sister give me?




John had 6 toy cars. His brother gave him 7 more toy cars. How many toy cars did John have in all?




Name:----- Date:-----

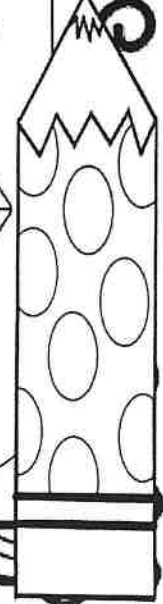
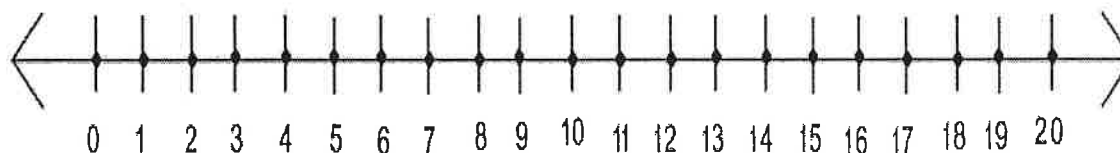
Solve each word problem



Sara had 11 carrots. She ate 2 carrots. How many carrots did she have left?




I had 17 pencils. I gave some to my friend and then I had 9 pencils left. How many pencils did I give to my friend?




Name:----- Date:-----

Draw the hands on each clock




4:45



3:30



6:00



12:30



10:15



7:30


Name:----- Date:-----

Compare the numbers $<$ $>$ $=$



45  62

56  26

76  67

45  54

22  79

23  24

87  77

36  26

65  56

43  44

37  67

76  87

48  68


65  34



Name:----- Date:-----

Write the missing number in the sequence

7,....,27,37



40,....,20,10


0,....,20,30,.....



39,29,19,.....



.....,18,16,14



.....,25,15,5




38,.....,18,8

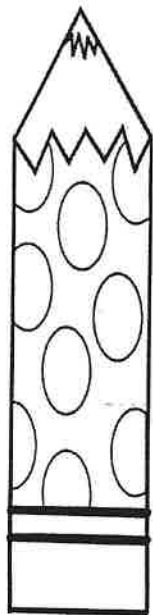


Name:----- Date:-----

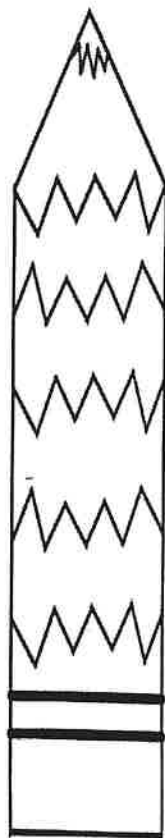
Compare the length of the pencils.



1



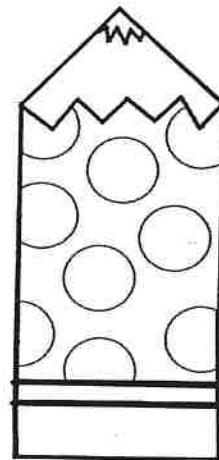
2



3



4



5

- Which pencil is the shortest?
- Which pencil is the longest?
- Order the pencils from shortest to longest using their numbers: